

A large, irregular pink brushstroke shape that serves as a background for the text. The stroke is thick and has a textured, hand-painted appearance with some darker and lighter shades of pink.

*Virtual
Learning
Week 6*

APRIL 20, 2020 - APRIL 24, 2020



Homework

Homework is a BIG part of your grade for the 4th quarter. I NEED to receive your homework EVERY day in order for you to receive a grade for the 4th quarter!

- All students who sent their homework this weekend! THANK YOU THANK YOU THANK YOU!! You are working hard to achieve your goals!

Week of 4/20/20- Zoom Class Schedule

Monday	10:00-10:35: Music with Mr. Della Ratta 10:35- 11:45: ZOOM with Ms. Winkler 1:10- 1:50: Purple and Blue Reading Group 2:30- 3:05: ENL ZOOM with Mrs. Gregori
Tuesday	<u>NO ZOOM WITH MS. Gillenwater</u> 2:25- 3:05: MEDIA with Mrs. Randazzo
Wednesday	10:00- 10:35: Media with Mrs. Randazzo 10:35- 11:45: ZOOM with Ms. Winkler 2:30-3:05: ENL Zoom with Mrs. Gregori
Thursday	<u>9:20: PACKET PICK-UP AT BARACK OBAMA</u> 10:00- 10:35: Physical Education with Mr. Jacobs 10:35- 11:45: ZOOM with Ms. Winkler 1:10- 1:50: Green Reading Group 2:30- 3:05: ENL Zoom with Mrs. Gregori
Friday	10:00- 10:35: Music with Mr. Taylor 10:35- 11:45: ZOOM with Ms. Winkler 1:10- 1:50: Yellow & Red Reading Group 2:30- 3:05: ENL Zoom with Mrs. Gregori

Engage



Practice 3-Digit Addition



Name _____

6.5

Write the sum.

1.

$$\begin{array}{r} 481 \\ + 259 \\ \hline \end{array}$$

2.

$$\begin{array}{r} 524 \\ + 137 \\ \hline \end{array}$$

3.

$$\begin{array}{r} 637 \\ + 297 \\ \hline \end{array}$$

PROBLEM SOLVING
Lesson 6.6

Name _____

Problem Solving • 3-Digit Subtraction

Essential Question How can making a model help when solving subtraction problems?



Number and Operations
in Base Ten—2.NBT.B.7

MATHEMATICAL PRACTICES
MP1, MP4, MP6



There were 436 people at the art show. 219 people went home. How many people stayed at the art show?



What do I need to find?

how many people
_____ stayed at the art show

What information do I need to use?

_____ people were at the art show.

Then, _____ people went home.


Show how to solve the problem.


Make a model. Then draw a quick picture of your model.

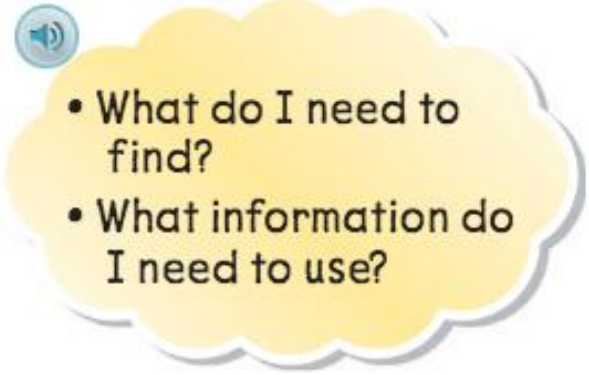
_____ people



Try Another Problem

 Make a model to solve. Then draw a quick picture of your model.

 1. There are 532 pieces of art at the show. 319 pieces of art are paintings. How many pieces of art are not paintings?

- 
- What do I need to find?
 - What information do I need to use?

_____ pieces of art

Homework

*Monday & Tuesday-
4/20/20*

❖ 6.6 Math Homework

❖ Written Response:


❖ Scholastic News: Video & Word Work Questions

• Chapter 2: Written Response Questions:

- 1. How did the faun convince Lucy to come to his cave?
- 3. Did you feel the movie scene was like the book or different than the book? Why?

❖ 1 Acellus Math lesson, 1 Acellus Science Lesson and 1 Acellus Reading Lesson

❖ IReady, RazKids OR Scholastic for 30 minutes



3-Digit Subtraction –Problem Solving
Name _____ 6.6
Make a model to solve. Then draw a Quick Picture of your model.

1. There were 277 children at the assembly. 127 children left the assembly. How many children are still there?
_____ children

2. Ainsley has 151 pages in her notebook. She tears out 107 pages. How many pages are still in the notebook?
_____ pages

$$\begin{array}{r} 277 \\ -127 \\ \hline \end{array}$$

SL.3 Video comprehension
Name: _____
Video: "What Are Endangered Animals?"
Watch a Video
Teachers: Students can read the questions before they watch the video. That way, they'll know what to pay attention to while watching!

1. When a type of animal is endangered, it is
 in danger of dying out forever
 never going to die out
 safe from harm

2. Pick one of the endangered animals from the video. Write it here. _____

3. Why is this animal endangered?

SL.2.4 Vocabulary
Name: _____
Ezra: This Is the World's Most Dangerous Cat
Word Work
Answer the questions about vocabulary words from your issue of Scholastic News.

1. A **predator** is an animal that _____
 hunts other animals for food
 is not good at hunting
 eats only plants

2. Which words describe a black-footed cat? (Circle) or color them.

fuzzy	deadly	tiny
tall	huge	fierce

3. When a type of animal is **endangered**, it is _____
 never going to die out
 in danger of dying out
 not scared of people

4. Why is it a problem that people are destroying the black-footed cat's **habitat**?



Happy
Wednesday



Heads proud

Avianah
Reyna
Juakeem
Jasneya
Jessie
Brayan
Jayliana
Isabella
Dylan
Danieda
Ashley



To all students who submitted their homework via email or text!

*Antonella
Aleen Gisselle*



Reading

Juakeem
Brayan
Antonella
Ashley
Danieda

Math

Brayan
Ashley
Juakeem
Kerwin
Danieda



Brayan
Jayliana
Ashley
Janelle
Dylan
Antonella
Kerwin
Avianah



Ms. Winkler's Class- ZOOM Codes- 4th Quarter	
Monday	FLES: 10:00-10:35 MEETING ID: 4658778238 PASSWORD: 961787
Tuesday	Art: 10:00- 10:35 ID: 910 040 028 Password: 057333 FLES: 2:25- 3:00 MEETING ID: 4658778238 PASSWORD: 961787
Wednesday	Technology: 10:00- 10:35 Meeting ID: 252 703 512 Password: 794952
Thursday	Physical Education: 10:00- 10:35 ID: 931 458 974
Friday	Music with Mr. Taylor: 10:00- 10:35 Meeting ID: 980 8927 8360 Password: 028820

Engage

3-Digit Subtraction – Problem Solving

Name _____ 6.6

Make a model to solve. Then draw a Quick Picture of your model.

<p>1. There were 271 children at the assembly. 127 children left the assembly. How many children are still there?</p> <p>_____</p>	<p></p> <p>_____ children</p>
<p>2. Ainsley has 151 pages in her notebook. She tears out 107 pages. How many pages are still in the notebook?</p> <p>_____</p>	<p></p> <p>_____ pages</p>

How Do You Find the Main Idea?

You can find the main idea of most stories in the first or last sentence.

Read the story below. Think about the most important idea in the story.

Winter is the coldest season. The days are short, and it gets dark early. Plants stop growing in the winter. Some animals grow thick coats to keep warm.

cold - colder - coldest
nice - nicer - nicest

Winter is the coldest season. The days are short, and it gets dark early. Plants stop growing in the winter. Some animals grow thick coats to keep warm.

1. Let's look at the chart below. The sentences in the top three boxes tell about the main idea of the story. But they do not tell the most important idea.
2. The first sentence of the story does tell the most important idea. This sentence tells what the story is mostly about.
3. Write the main idea in the empty box below.

①
The days are short, and it gets dark early.

②
Plants stop growing in the winter.

③
Some animals grow thick coats to keep warm.

Winter is the coldest season.

Homework

Wednesday- 4/22/20

1:10

Quick

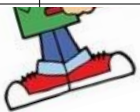
- ❖ 6.7 Math Homework
- ❖ "The Most Dangerous Animal in the world" homework
 - ❖ Reading: Main Idea activity
- ❖ 1 Acellus Math lesson, 1 Acellus Science Lesson & 1 Acellus Reading Lesson
 - ❖ IReady, RazKids OR Scholastic for 30 minutes

3-Digit Subtraction
Regroup Tens

6.7


Write the difference.

Hundreds	Tens	Ones	2.	Hundreds	Tens	Ones
3	5	4		4	6	7
1	1	7	-	2	4	8



Read this story about Pete. As you read, think about the main idea of the story. Then answer the questions.

Pete loves to go to the circus. Some people like to watch the elephants. Others like to watch the lion tamers. But not Pete. Pete likes to watch the clowns. The clowns act silly and make him laugh. Pete can't wait for the next circus to come to his town.



1. What is the main idea of the story?
- Ⓐ Some people like to watch the elephants.
 - Ⓑ Others like to watch the lion tamers.
 - Ⓒ Pete loves to go to the circus.
 - Ⓓ Pete can't wait for the next circus to come to his town.
2. Where or how did you find the main idea?
- Ⓐ in the first sentence of the story
 - Ⓑ in the last sentence of the story
 - Ⓒ in the middle of the story
 - Ⓓ by thinking about what the story is mostly about



☒ HAPPY ☒
Thursday

VectorStock®

VectorStock.com/9419173



Reading

Juakeem

Brayan

Ashley

Samantha

Math

Juakeem

Brayan

Ashley



Jessie

Jasneya

Brayan

Avianah

Ashley

Dylan

Excellent
Work!

All students who sent
their homework
through text or email!
Excellent job!!



**All students who
are completing
Acellus lessons
daily! Excellent
job!!!!**

Engage



3-Digit Subtraction

Regroup Tens



6.7

Name _____

Write the difference.

1.	Hundreds	Tens	Ones	2.	Hundreds	Tens	Ones
		<input type="text" value="4"/>	<input type="text" value="14"/>			<input type="text"/>	<input type="text"/>
	3	5	4		4	6	7
	- 1	1	7		- 2	4	8
	2	3	7				

PART TWO: Learn About the Strategy

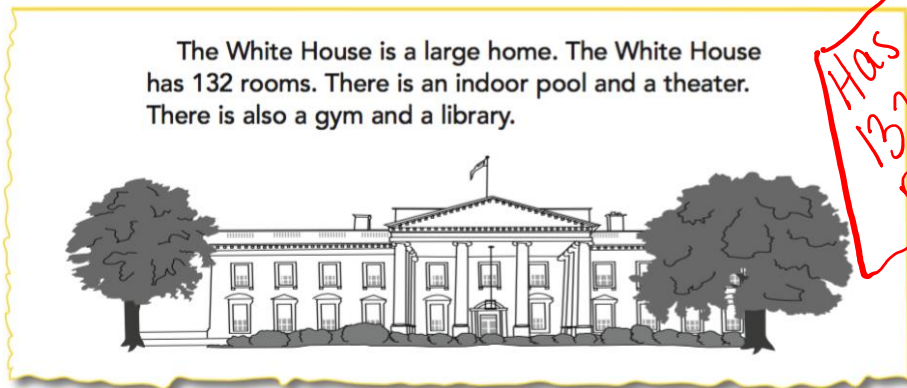
WHAT TO KNOW

The most important idea in a story is called the **main idea**.
The main idea tells what a story is mostly or mainly about.

- The main idea is sometimes found in the first sentence.
- The main idea is sometimes found in the last sentence.
- The main idea is sometimes not found in a sentence. You can figure out the main idea by thinking about what the story is mostly about. Ask yourself, "What is the story telling me?"

Topic Sentence → main idea

Read Marta's story about the White House. As you read, think about the most important idea in the story.



The most important idea in the story is found in the first sentence.
The most important idea is: **The White House is a large home.**

Has 132 rooms

indoor pool and theater

gym library

The white house is a large home.

6.8

Phys. Ed
12345

1:10

1

1

Homework

Thursday- 4/23/20


Yellow & Red @ 1:10

❖ 6.8 Math Homework

❖ Main Idea Homework

❖ 1 Acellus Math lesson, 1 Acellus Science Lesson & 1 Acellus Reading Lesson

❖ IReady, RazKids OR Scholastic for 30 minutes



3-Digit Subtraction! 6.8

Find the difference.

1.	<table border="1"><thead><tr><th>Hundreds</th><th>Tens</th><th>Ones</th></tr></thead><tbody><tr><td>5</td><td>2</td><td>5</td></tr><tr><td>-</td><td>3</td><td>5</td></tr><tr><td></td><td></td><td></td></tr></tbody></table>	Hundreds	Tens	Ones	5	2	5	-	3	5				2.	<table border="1"><thead><tr><th>Hundreds</th><th>Tens</th><th>Ones</th></tr></thead><tbody><tr><td>4</td><td>4</td><td>9</td></tr><tr><td>-</td><td>1</td><td>8</td></tr><tr><td></td><td></td><td></td></tr></tbody></table>	Hundreds	Tens	Ones	4	4	9	-	1	8			
Hundreds	Tens	Ones																									
5	2	5																									
-	3	5																									
Hundreds	Tens	Ones																									
4	4	9																									
-	1	8																									
3.	<table border="1"><thead><tr><th>Hundreds</th><th>Tens</th><th>Ones</th></tr></thead><tbody><tr><td>6</td><td>3</td><td>4</td></tr><tr><td>-</td><td>4</td><td>7</td></tr><tr><td></td><td></td><td></td></tr></tbody></table>	Hundreds	Tens	Ones	6	3	4	-	4	7				4.	<table border="1"><thead><tr><th>Hundreds</th><th>Tens</th><th>Ones</th></tr></thead><tbody><tr><td>8</td><td>6</td><td>8</td></tr><tr><td>-</td><td>6</td><td>4</td></tr><tr><td></td><td></td><td></td></tr></tbody></table>	Hundreds	Tens	Ones	8	6	8	-	6	4			
Hundreds	Tens	Ones																									
6	3	4																									
-	4	7																									
Hundreds	Tens	Ones																									
8	6	8																									
-	6	4																									

Read this story about baby animals. As you read, ask yourself, "What is the story mostly about?" Then answer the questions.

A baby cat is called a kitten. Kittens love to play. A baby kangaroo is called a joey. A joey is about the size of a bumblebee. A baby horse is called a foal. A foal can walk the day it is born! Some people call a small child a kid. Did you know that this is also the name for a baby goat? There are lots of different names for baby animals.



3. What is the story mostly about?
- Ⓐ A baby cat is called a kitten.
 - Ⓑ A foal can walk the day it is born!
 - Ⓒ There are lots of different names for baby animals.
 - Ⓓ A joey is about the size of a bumblebee.
4. Where or how did you find the main idea?
- Ⓐ in the first sentence of the story
 - Ⓑ in the last sentence of the story
 - Ⓒ in the middle of the story
 - Ⓓ by thinking about what the story is mostly about





Brayan
Kerwin
Ashley
Juakeem



YOU ARE
AWESOME!!! I AM
SO PROUD OF
EVERY STUDENT THAT
IS DOING THEIR
WORK **EVERY DAY!!!!**



Avianah
Reyna
Janelle
Dylan
Brayan
Jayliana
Brytney
Ashley



Isabella
Ashley
Dylan
Anthonella
Brayan
Janelle

WE REALLY MISS OUR
BARACK OBAMA FAMILY




We're All in This Together!

I MISS SEEING YOU IN ROOM 18 EVERY DAY!

<https://www.youtube.com/watch?v=7Mkp3KmP1Ck>

Engage



3-Digit Subtraction!

6.8

Find the difference.

1.	Hundreds	Tens	Ones
	<input type="text"/>	<input type="text"/>	<input type="text"/>
	5	2	5
	- 3	5	2

2.	Hundreds	Tens	Ones
	<input type="text"/>	<input type="text"/>	<input type="text"/>
	4	4	9
	- 1	8	5

3.	Hundreds	Tens	Ones
	<input type="text"/>	<input type="text"/>	<input type="text"/>
	6	3	4
	- 4	7	6

4.	Hundreds	Tens	Ones
	<input type="text"/>	<input type="text"/>	<input type="text"/>
	8	6	8
	- 6	4	3



Chapter 6: 3-Digit Addition and Subtr...

Go to Page →



My Classes



Contents



Resources



Bookmarks



Notes



Page View



Search



More

Model and Draw

Sometimes you will regroup more than once in subtraction problems.

$$\begin{array}{r}
 725 \\
 - 349 \\
 \hline
 376
 \end{array}$$

Regroup 2 tens 5 ones as 1 ten 15 ones. Subtract the ones.

Regroup 7 hundreds 1 ten as 6 hundreds 11 tens. Subtract the tens.

Subtract the hundreds.

Share and Show



Solve. Write the difference.

$$\begin{array}{r}
 \text{H} \quad \text{T} \quad \text{O} \\
 348 \\
 - 138 \\
 \hline
 210
 \end{array}$$

$$\begin{array}{r}
 \text{H} \quad \text{T} \quad \text{O} \\
 174 \\
 - 182 \\
 \hline
 092
 \end{array}$$

$$\begin{array}{r}
 \text{H} \quad \text{T} \quad \text{O} \\
 546 \\
 - 267 \\
 \hline
 279
 \end{array}$$

$$\begin{array}{r}
 267 + 279 \\
 \hline
 546
 \end{array}$$

$$\begin{array}{r}
 \text{H} \quad \text{T} \quad \text{O} \\
 859 \\
 - 487 \\
 \hline
 372
 \end{array}$$

$$\begin{array}{r}
 747 \\
 - 159 \\
 \hline
 588
 \end{array}$$

$$\begin{array}{r}
 938 \\
 - 370 \\
 \hline
 568
 \end{array}$$

page 440
Chapter 6

Weekend Homework



Friday- 4/24/20

6.9

❖ **Math Homework: Page 443 & 444 in Chapter 6 Workbook**

❖ Listen to Chapter 2 reading of "The Lion, the Witch & The Wardrobe"-
Email Ms. Winkler your **favorite** part of the chapter.

❖ **Read a book on RazKids- Email Ms. Winkler the following:**

- Title
- Main Idea
- 2 Key Details

❖ **1 Acellus Math lesson, 1 Acellus Science Lesson and 1 Acellus Reading Lesson**

❖ IReady, RazKids OR Scholastic for 30 minutes

